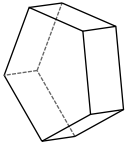


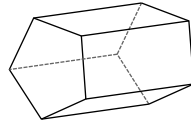
# Classifying Solids

Name each figure.

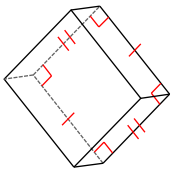
1)



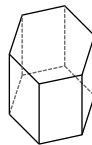
2)



3)



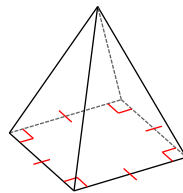
4)



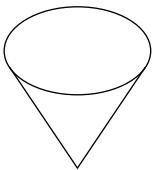
5)



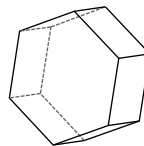
6)



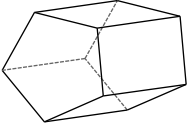
7)



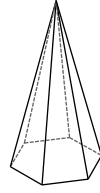
8)



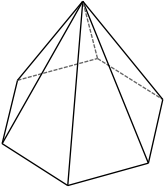
9)



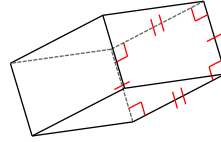
10)



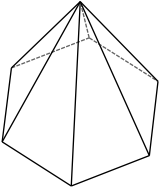
11)



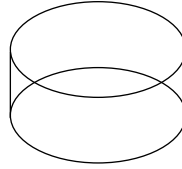
12)



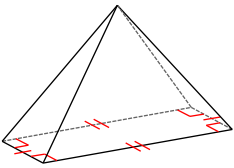
13)



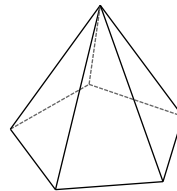
14)



15)



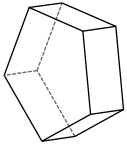
16)



# Classifying Solids

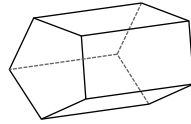
Name each figure.

1)



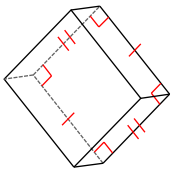
pentagonal prism

2)



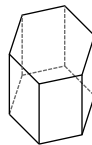
pentagonal prism

3)



rectangular prism

4)



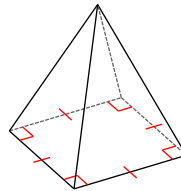
hexagonal prism

5)



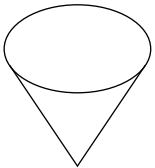
cone

6)



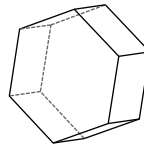
square pyramid

7)



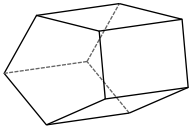
cone

8)



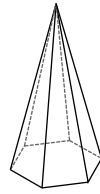
hexagonal prism

9)



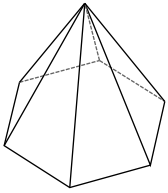
pentagonal prism

10)



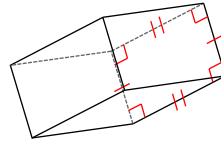
hexagonal pyramid

11)



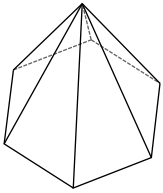
hexagonal pyramid

12)



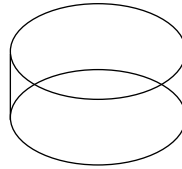
rectangular prism

13)



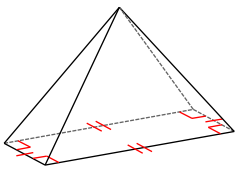
hexagonal pyramid

14)



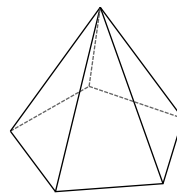
cylinder

15)



rectangular pyramid

16)



pentagonal pyramid