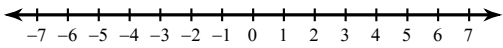


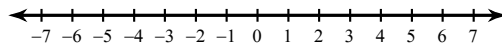
## Inequalities and Their Graphs

Draw a graph for each inequality.

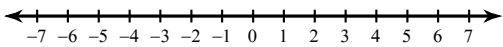
1)  $x \leq 1$



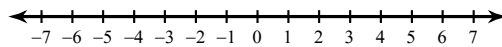
2)  $m > -2$



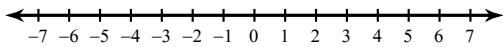
3)  $x \leq 4$



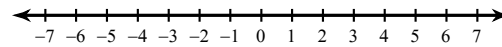
4)  $m > -6$



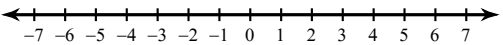
5)  $-5 \geq a$



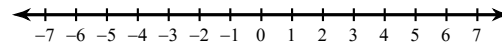
6)  $4 \geq x$



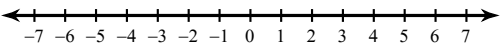
7)  $-2 < b$



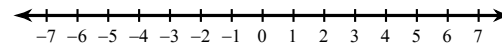
8)  $1 > x$



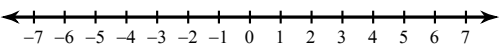
9)  $-r \leq -2$



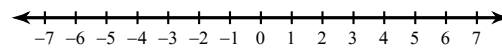
10)  $4 \leq -n$



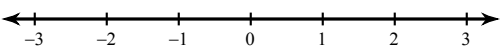
11)  $-n \leq -5$



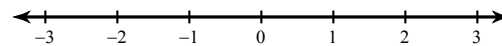
12)  $1 < -x$



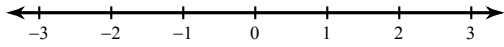
13)  $n \geq \frac{3}{2}$



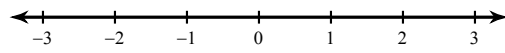
14)  $k < 2$



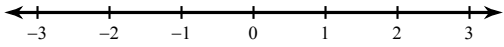
15)  $p \geq -1\frac{1}{2}$



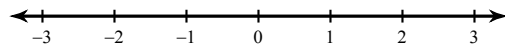
16)  $n \geq 1$



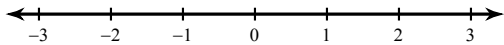
17)  $x \geq -2$



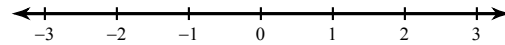
18)  $-2\frac{1}{2} \leq n$



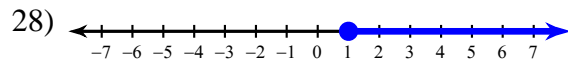
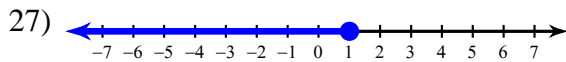
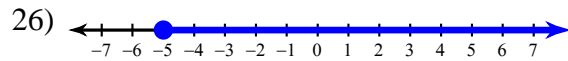
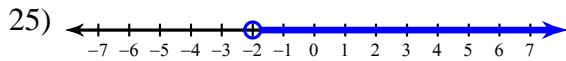
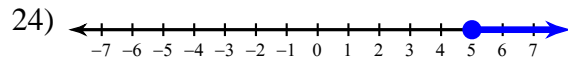
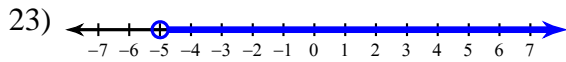
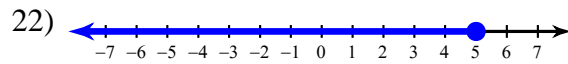
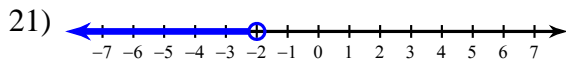
19)  $-1\frac{1}{2} > -n$



20)  $-1\frac{1}{2} \geq v$



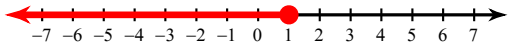
**Write an inequality for each graph.**



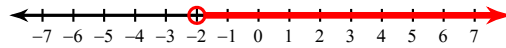
## Inequalities and Their Graphs

Draw a graph for each inequality.

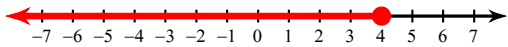
1)  $x \leq 1$




2)  $m > -2$



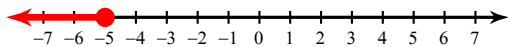
3)  $x \leq 4$



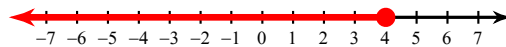
4)  $m > -6$



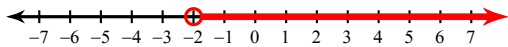
5)  $-5 \geq a$



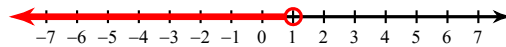
6)  $4 \geq x$



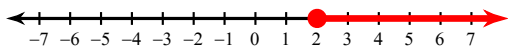
7)  $-2 < b$



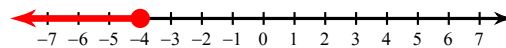
8)  $1 > x$



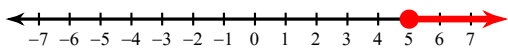
9)  $-r \leq -2$



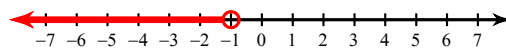
10)  $4 \leq -n$



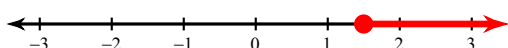
11)  $-n \leq -5$



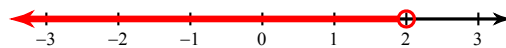
12)  $1 < -x$



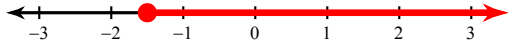
13)  $n \geq \frac{3}{2}$



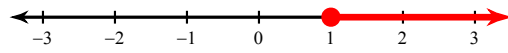
14)  $k < 2$



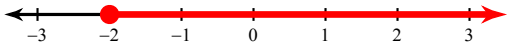
15)  $p \geq -1\frac{1}{2}$



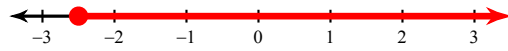
16)  $n \geq 1$



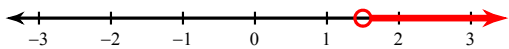
17)  $x \geq -2$



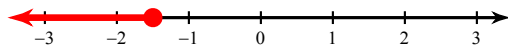
18)  $-2\frac{1}{2} \leq n$



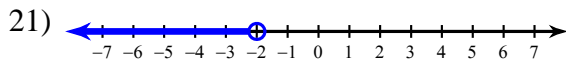
19)  $-1\frac{1}{2} > -n$



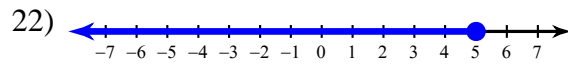
20)  $-1\frac{1}{2} \geq v$



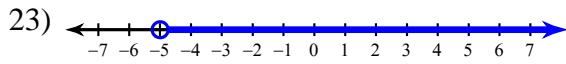
**Write an inequality for each graph.**



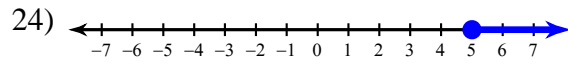
$a < -2$



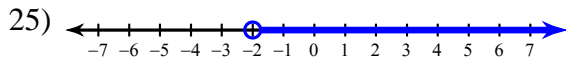
$x \leq 5$



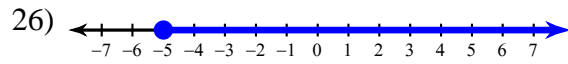
$b > -5$



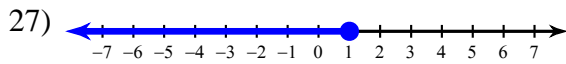
$x \geq 5$



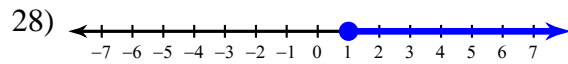
$b > -2$



$a \geq -5$



$x \leq 1$



$x \geq 1$