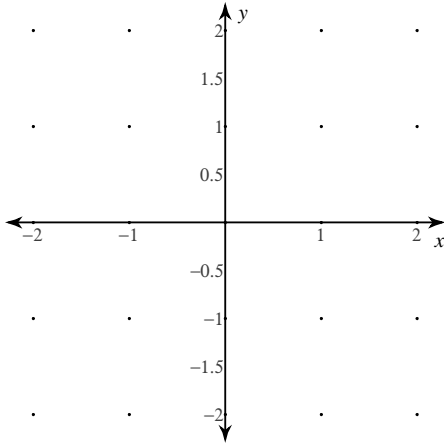


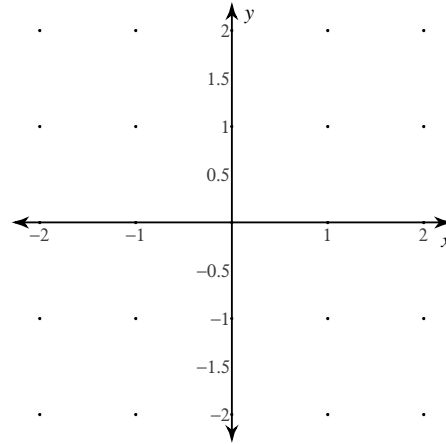
## Slope Fields

Sketch the slope field for each differential equation.

1)  $\frac{dy}{dx} = x$

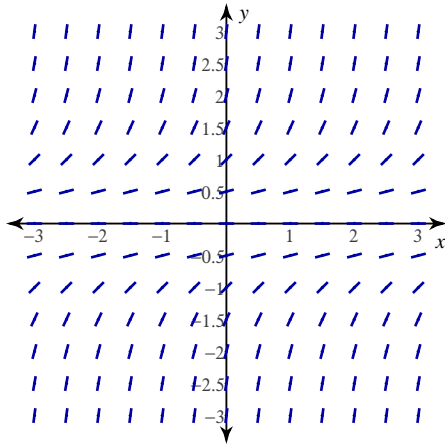


2)  $\frac{dy}{dx} = -\frac{x}{y}$



For each problem, find a differential equation that could be represented with the given slope field.

3)



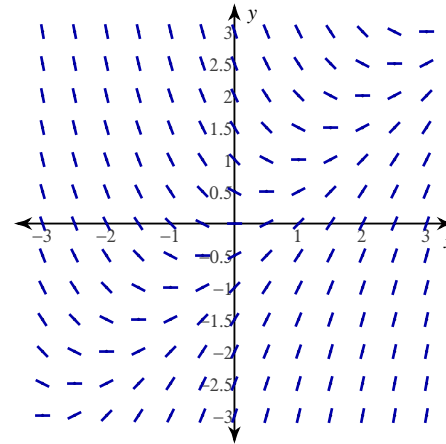
A)  $\frac{dy}{dx} = -\frac{1}{x}$

B)  $\frac{dy}{dx} = -\frac{1}{y}$

C)  $\frac{dy}{dx} = 1$

D)  $\frac{dy}{dx} = y^2$

4)



A)  $\frac{dy}{dx} = x + y$

B)  $\frac{dy}{dx} = x - y$

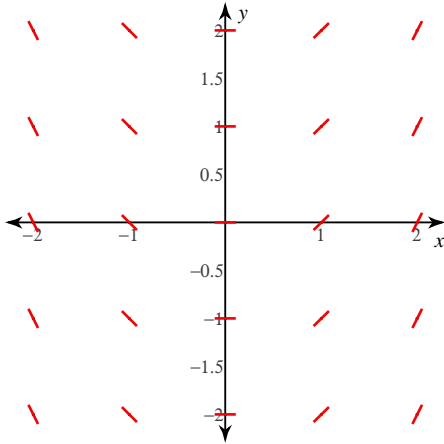
C)  $\frac{dy}{dx} = xy$

D)  $\frac{dy}{dx} = -xy$

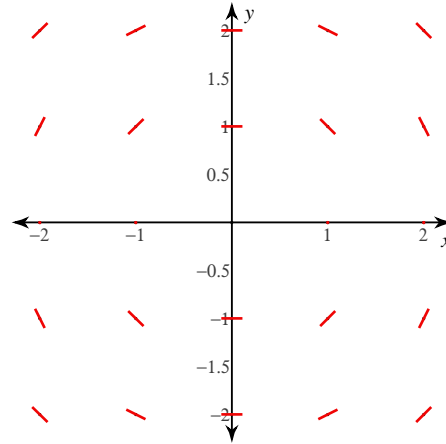
## Slope Fields

Sketch the slope field for each differential equation.

1)  $\frac{dy}{dx} = x$

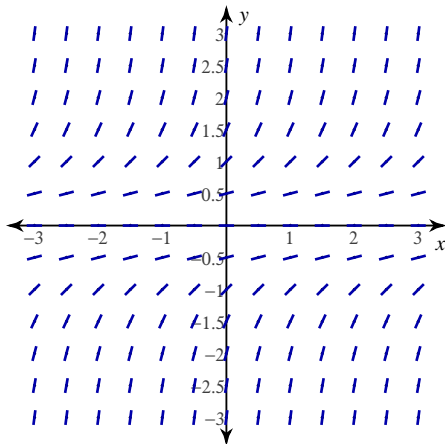


2)  $\frac{dy}{dx} = -\frac{x}{y}$



For each problem, find a differential equation that could be represented with the given slope field.

3)



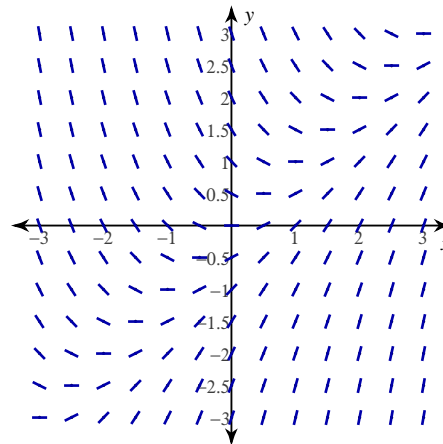
A)  $\frac{dy}{dx} = -\frac{1}{x}$

B)  $\frac{dy}{dx} = -\frac{1}{y}$

C)  $\frac{dy}{dx} = 1$

\*D)  $\frac{dy}{dx} = y^2$

4)



A)  $\frac{dy}{dx} = x + y$

\*B)  $\frac{dy}{dx} = x - y$

C)  $\frac{dy}{dx} = xy$

D)  $\frac{dy}{dx} = -xy$