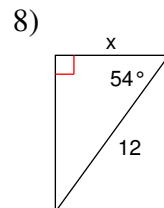
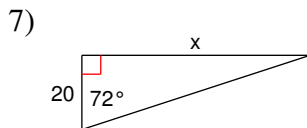
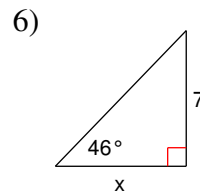
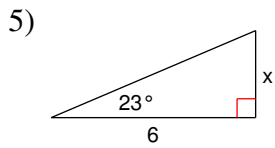
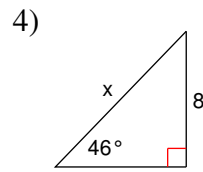
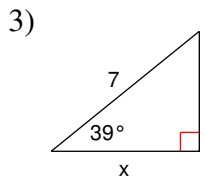
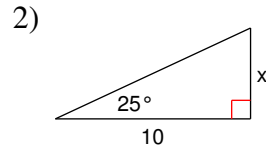
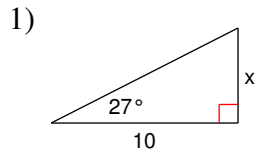
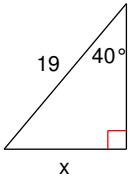


# Using Trigonometry To Find Lengths

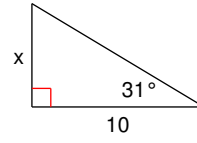
**Find the missing side. Round to the nearest tenth.**



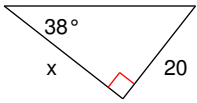
9)



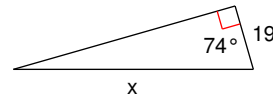
10)



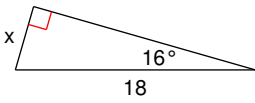
11)



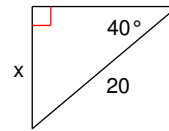
12)



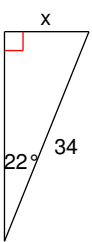
13)



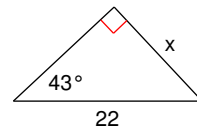
14)



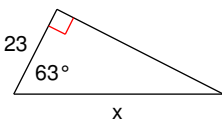
15)



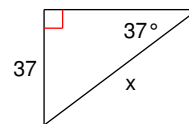
16)



17)



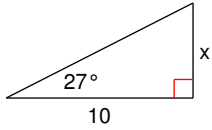
18)



## Using Trigonometry To Find Lengths

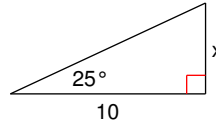
Find the missing side. Round to the nearest tenth.

1)



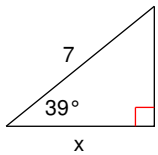
5.1

2)



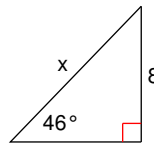
4.7

3)



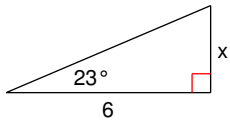
5.4

4)



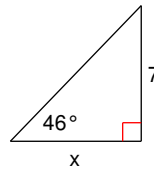
11.1

5)



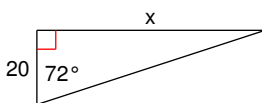
2.5

6)



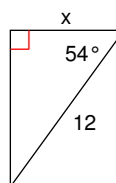
6.8

7)



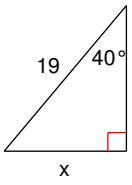
61.6

8)



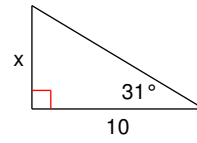
7.1

9)



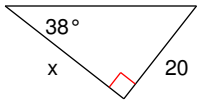
12.2

10)



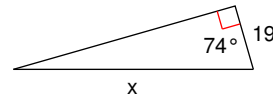
6.0

11)



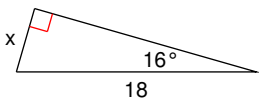
25.6

12)



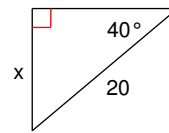
68.9

13)



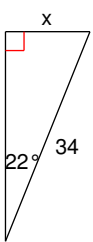
5.0

14)



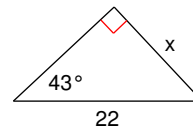
12.9

15)



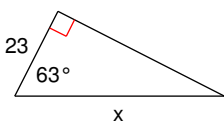
12.7

16)



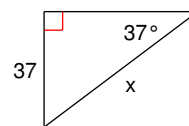
15.0

17)



50.7

18)



61.5