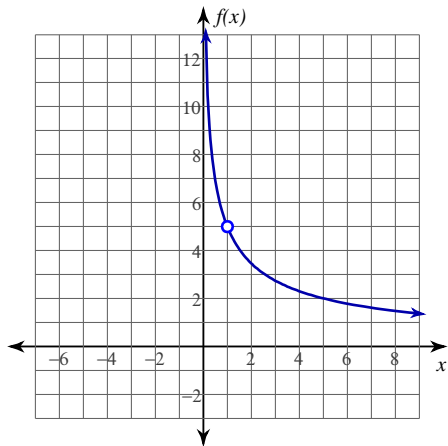


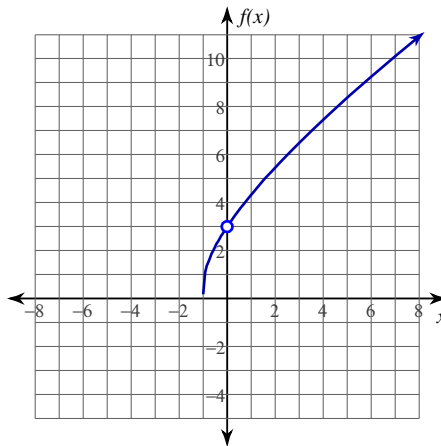
## L'Hôpital's Rule

Evaluate each limit using L'Hôpital's Rule.

$$1) \lim_{x \rightarrow 1} \frac{5 \ln x}{x - 1}$$



$$2) \lim_{x \rightarrow 0} \frac{3x}{\ln(x+1)}$$



$$3) \lim_{x \rightarrow 0^+} 5x^2 \ln x$$

$$4) \lim_{x \rightarrow \infty} 4x \cdot e^{-x}$$

$$5) \lim_{x \rightarrow \frac{\pi}{2}} (3 \sec x - 3 \tan x)$$

$$6) \lim_{x \rightarrow \infty} \left( \frac{x^2}{x-1} - \frac{x^2}{x+1} \right)$$

$$7) \lim_{x \rightarrow 0^+} 5 \cdot (\tan x)^{\sin x}$$

$$8) \lim_{x \rightarrow 0^+} 3x^x$$

Evaluate each limit. Use L'Hôpital's Rule if it can be applied. If it cannot be applied, evaluate using another method and write a \* next to your answer.

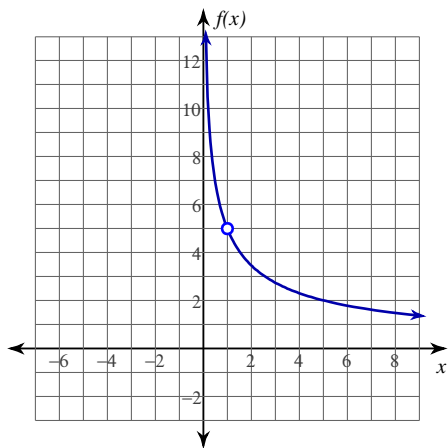
$$9) \lim_{x \rightarrow 0} \frac{e^x - e^{-x}}{x}$$

$$10) \lim_{x \rightarrow 0^+} \frac{e^x + e^{-x}}{\sin(2x)}$$

## L'Hôpital's Rule

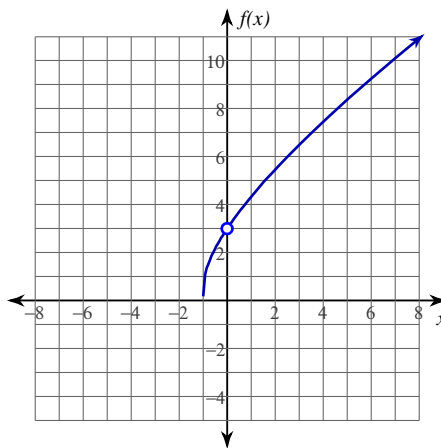
Evaluate each limit using L'Hôpital's Rule.

1)  $\lim_{x \rightarrow 1} \frac{5 \ln x}{x - 1}$



5

2)  $\lim_{x \rightarrow 0} \frac{3x}{\ln(x+1)}$



3

3)  $\lim_{x \rightarrow 0^+} 5x^2 \ln x$

0

4)  $\lim_{x \rightarrow \infty} 4x \cdot e^{-x}$

0

5)  $\lim_{x \rightarrow \frac{\pi}{2}} (3 \sec x - 3 \tan x)$

0

6)  $\lim_{x \rightarrow \infty} \left( \frac{x^2}{x-1} - \frac{x^2}{x+1} \right)$

2

7)  $\lim_{x \rightarrow 0^+} 5 \cdot (\tan x)^{\sin x}$

5

8)  $\lim_{x \rightarrow 0^+} 3x^x$

3

Evaluate each limit. Use L'Hôpital's Rule if it can be applied. If it cannot be applied, evaluate using another method and write a \* next to your answer.

9)  $\lim_{x \rightarrow 0} \frac{e^x - e^{-x}}{x}$

2

10)  $\lim_{x \rightarrow 0^+} \frac{e^x + e^{-x}}{\sin(2x)}$

 $\infty$  \*